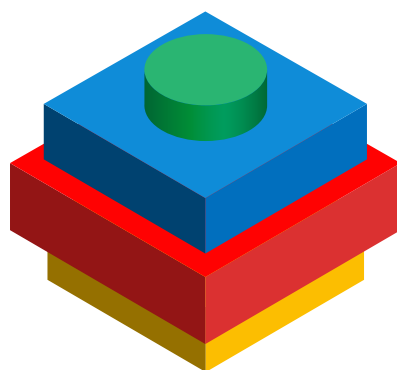




Observe detenidamente la figura tridimensional. Luego, analice las imágenes que se muestran debajo. **¿Cómo se ve de arriba esta figura?**
Redondee la opción correcta.


Tenga en cuenta los tamaños de los objetos y cómo se relacionan entre ellos.



a.




b.




c.




d.



e.




f.






Observe detenidamente la figura tridimensional. Luego, analice las imágenes que se muestran debajo. **¿Cómo se ve de arriba esta figura?** Redondee la opción correcta.


Tenga en cuenta los tamaños de los objetos y cómo se relacionan entre ellos.



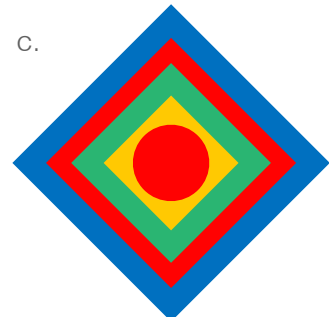
a.




b.




c.




d.



e.




f.



g.



h.



i.

